



UNIVERSITY OF CAMBRIDGE INTERNATIONAL EXAMINATIONS  
General Certificate of Education Ordinary Level

www.PapaCambridge.com

---

**GEOGRAPHY**

**2217/01**

Paper 1

**May/June 2007**

INSERT

**1 hour 45 minutes**

---

**READ THESE INSTRUCTIONS FIRST**

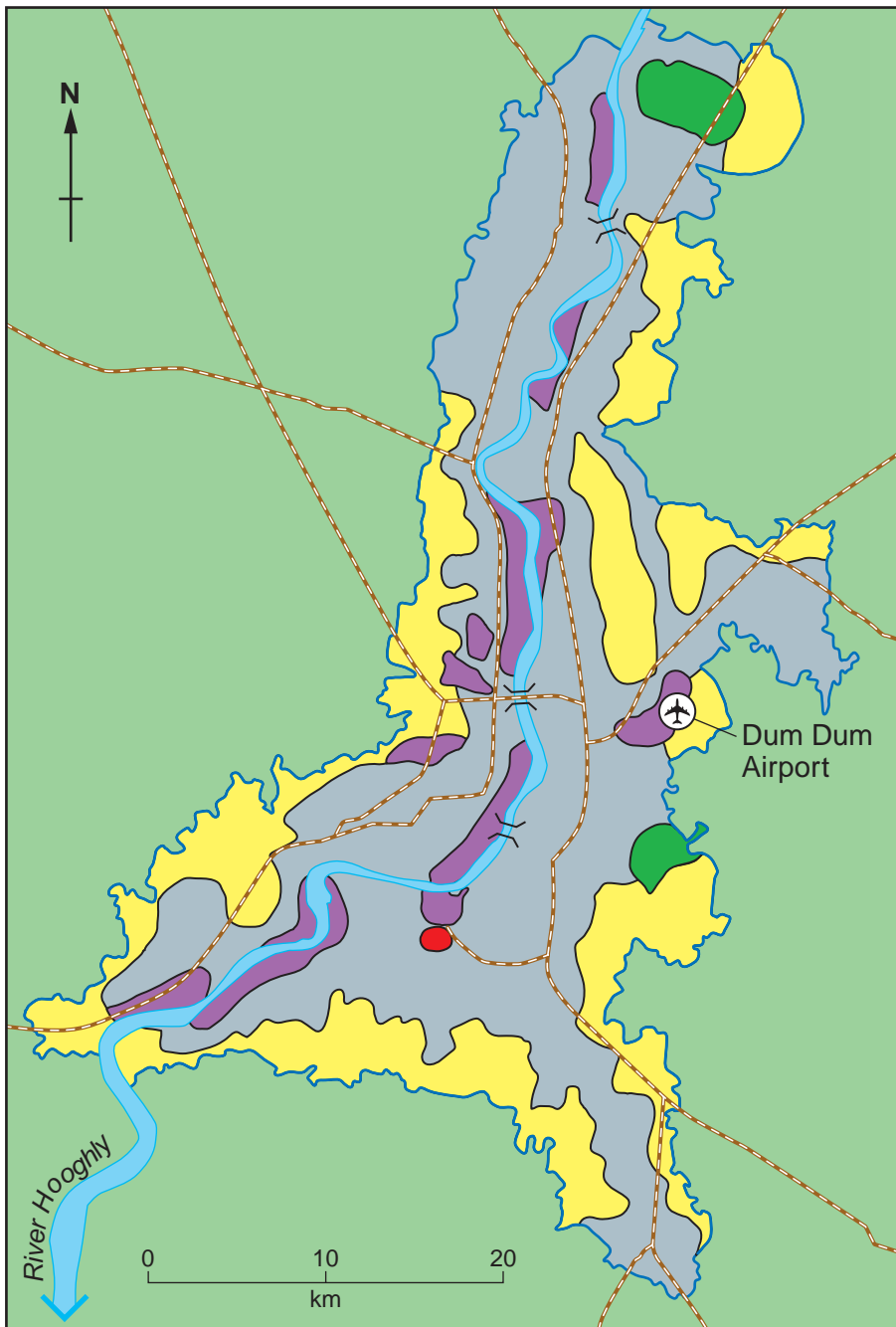
This Insert contains Fig. 3 for Question 2, Photographs A, B and C for Question 3 and Photograph D for Question 4.










---

This document consists of **5** printed pages and **3** blank pages.



Fig. 3 for Question 2



Key					
	Residential		Open space		Railway
	Industrial		Other use		Bridge
	Commercial		City boundary		Airport

Photograph A for Question 3



Photograph B for Question 3




Photograph C for Question 3 is on page 4

Photograph C for Question 3



Photograph D for Question 4



Key  edge of floodplain





